

Compito di Elettrotecnica

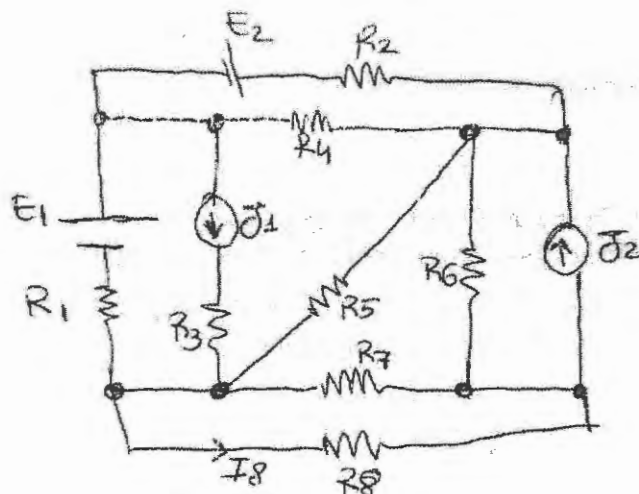
10 Maggio 2022

Nome e Cognome Matricola.....

Corso di Laurea.....

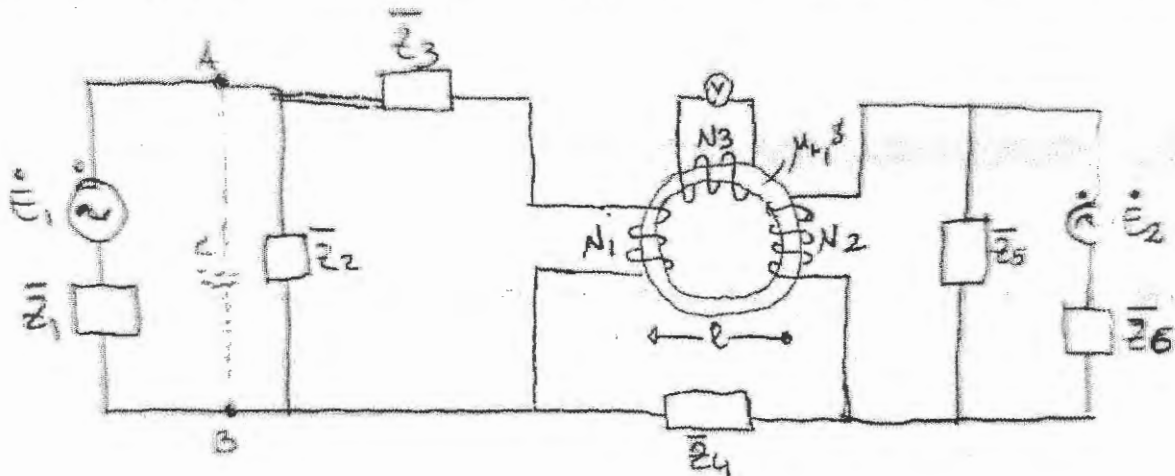
ES.1—Il sistema si trova a regime. Determinare la corrente che scorre sulla resistenza R_8 applicando il teorema di Thevenin.

$E_1 = 3V$; $E_2=5V$; $J_1 = J_2 = 2A$; $R_1= 1\Omega$; $R_2=R_4=R_6=2\Omega$; $R_3= R_5 = R_7= 3\Omega$; $R_8= 4\Omega$



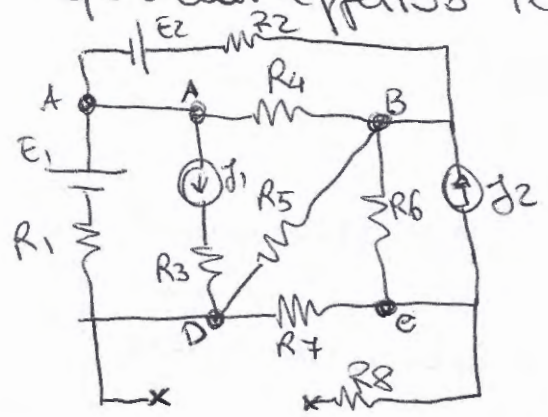
ES.2 – Dato il circuito in figura, determinare la capacità da inserire tra i punti A e B per rifasare totalmente il carico a valle. Determinare inoltre il valore della tensione misurata dal voltmetro ideale prima del rifasamento.

$\dot{E}_1 = 3 + j [V]$; $\dot{E}_2 = 4 + 2j [V]$; $\bar{Z}_1 = \bar{Z}_3 = \bar{Z}_5 = 1 - 2j [\Omega]$; $f=50Hz$; $\bar{Z}_2 = \bar{Z}_4 = \bar{Z}_6 = 1 + 5j [\Omega]$; $S=4cm^2$; $l= 2cm$; $\mu_r = 1000$; $N_1=100$; $N_2=200$; $N_3=300$

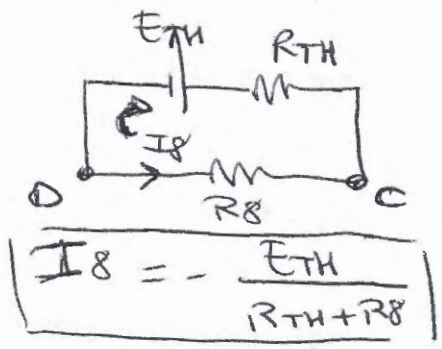


ES. N. 1

Determinare la corrente I_8 applicando il Teo. Thevenin. quindi effettua il taglio sul ramo in cui e' presente R_8 !



circ. equiv. applicando Thevenin \Rightarrow

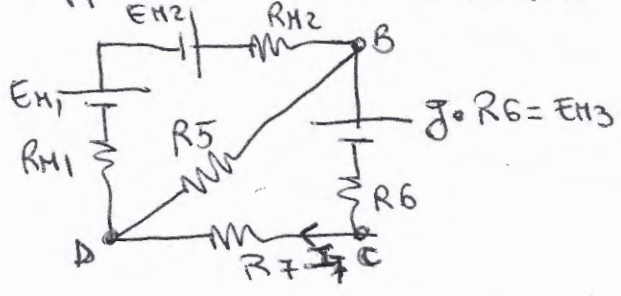


$$I_8 = - \frac{E_{TH}}{R_{TH} + R_8}$$

Procediamo con il calcolo di E_{TH} e R_{TH} :

$E_{TH} = V_{DC} (0)$

Applico Millman Tra AD - BC - AB:



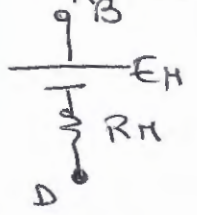
$$E_{H1} = \frac{E_1 - J_1}{\frac{1}{R_1}}$$

$$R_{H1} = R_1$$

$$E_{H2} = \frac{E_2 / R_2}{\frac{1}{R_2} + \frac{1}{R_4}}$$

$$R_{H2} = \frac{1}{\frac{1}{R_2} + \frac{1}{R_4}}$$

Applico Millman Tra B-D:



$$E_H = \frac{\left(\frac{E_{H1} + E_{H2}}{R_{H1} + R_{H2}} \right) + \frac{E_{H3}}{R_6 + R_7}}{\frac{1}{R_{H1} + R_{H2}} + \frac{1}{R_5} + \frac{1}{R_6 + R_7}}$$

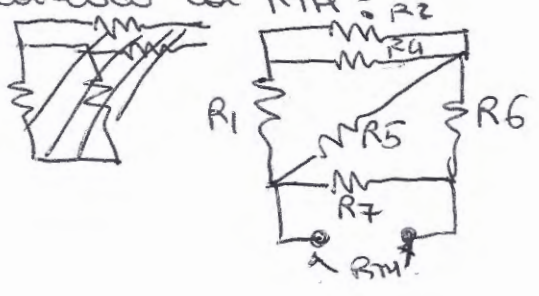
$V_{BD} = E_H$

Nota la V_{BD} , mi calcolo la I_7 e poi la V_{DC} :

$$V_{BD} = E_{H3} + I_7 (R_6 + R_7) \Rightarrow I_7 = \frac{V_{BD} - E_{H3}}{R_6 + R_7}$$

$V_{DC} = - I_7 \cdot R_7 = E_{TH}$

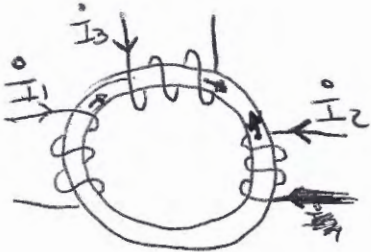
Calcolo la R_{TH} :



$$R_S = \left[(R_2 // R_4) + R_1 \right] // R_5$$

$$R_{TH} = (R_S + R_6) // R_7$$

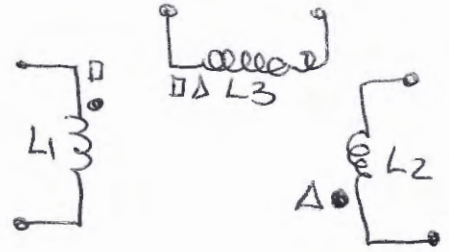
ES. N=2



$$M_{12} = M_{21} (< 0)$$

$$M_{13} = M_{31} (> 0)$$

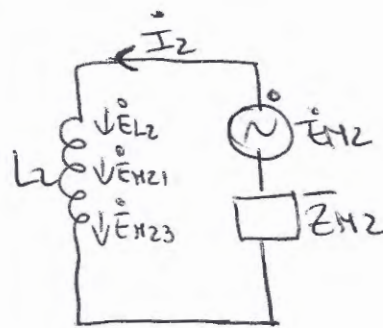
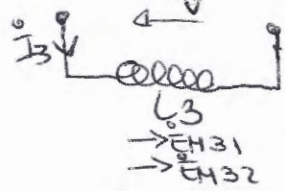
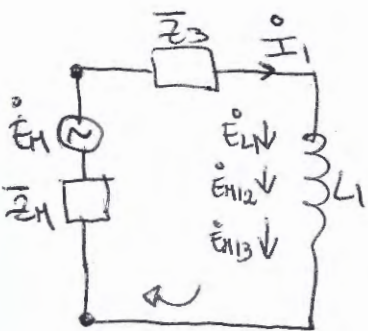
$$M_{23} = M_{32} (< 0)$$



Non è necessario determinare L_3 in quanto il voltmetro si compone da c.a., essendo ideale, quindi su L_3 non scorre corrente $I_3 = 0$.

$$L_1 = \frac{N_1^2}{\text{Re} \mu_1} \quad L_2 = \frac{N_2^2}{\text{Re} \mu_2} \quad \text{Re} \mu_1 = \text{Re} \mu_2 = \frac{\mu_0 \mu_r \mu_s}{l}$$

$$M_{12} = \sqrt{L_1 L_2} \quad M_{13} = \frac{N_1 N_3}{\text{Re} \mu_1} \quad M_{23} = \frac{N_2 N_3}{\text{Re} \mu_2}$$



#2

$$E_{M1} = \frac{E_1 / Z_1}{1/Z_1 + 1/Z_2}$$

$$Z_{M1} = \frac{1}{1/Z_1 + 1/Z_2}$$

$$E_{M2} = \frac{E_2 / Z_2}{1/Z_2 + 1/Z_1}$$

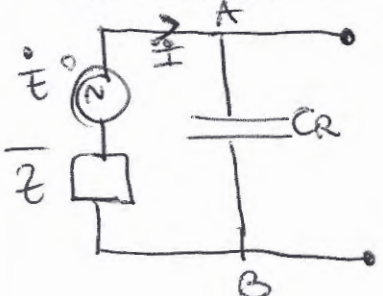
$$Z_{M2} = \frac{1}{1/Z_2 + 1/Z_1}$$

$$\begin{cases} E_{M1} + E_{L1} + E_{M12} + E_{M13} = I_1 (Z_{M1} + Z_3) \\ E_{M2} + E_{L2} + E_{M21} + E_{M23} = I_2 Z_{M2} \\ \dot{V} + E_{M31} + E_{M32} = 0 \end{cases} \Rightarrow I_1 \text{ e } I_2$$

Il voltmetro legge il valore eff. della tensione $V = |V|$

$$S_{AB} = \dot{V}_{AB} \cdot \dot{I}$$

Dal circuito iniziale:



#2

Dal circuito #1 si ottiene:

$$\dot{V}_{AB} = E_{M1} - Z_{M1} \dot{I}_1$$

Dal circuito #2 si ottiene:

$$\dot{V}_{AB} = E - \dot{I} Z \Rightarrow \dot{I} = \frac{\dot{V}_{AB} - E}{Z}$$

Calcolare la potenza complessa $\bar{S}_{AB} = \dot{V}_{AB} \dot{I} = P_{AB} + jQ_{AB}$

se $Q_{AB} > 0$ allora si assorbe potenza con $Q = \frac{Q_{AB}}{\omega N_{AB}^2}$